

Name: \_\_\_\_\_


Date: \_\_\_\_\_

### Chapter 8 Test Page 1

1. Write these times using numbers and a.m. or p.m.


a) 1 o'clock in the morning

b) 11 o'clock at night



a)

1/2



b)

1/2

2. Write these morning times 2 ways with numbers and words.

a)



\_\_\_\_\_ : \_\_\_\_\_

\_\_\_\_\_

b)



\_\_\_\_\_ : \_\_\_\_\_

\_\_\_\_\_

4

3. Write the numeric date and the 24-hour time for your birth.

\_\_ : \_\_

\_\_ / \_\_ / \_\_\_\_  
month Day year

15

4. Write the numeric date and the 24-hour time of your first class of the day (today).

Language Arts at ten minutes to nine

Date: \_\_\_\_ - \_\_\_\_ - \_\_\_\_  
year month day

Time: \_\_\_\_ : \_\_\_\_

5

18

5. Write the 24 hour time in standard form. (12 hour analog or digital clock)

22:45         :            12

6. Write the 24-hour time in standard form. (use a.m. or p.m.)

09:56  
\_\_\_\_\_ 12

7. Write the standard time in the 24-hour time form.

7:30 AM  
   :            12

8. Write the standard time in the 24-hour form.

9:45 PM         :            12

9. Write the times using numbers and A.M. or P.M.

a) A quarter to 10 in the morning. \_\_\_\_\_

b) A quarter past 11 at night. \_\_\_\_\_

10. Write the numeric date in calendar form.

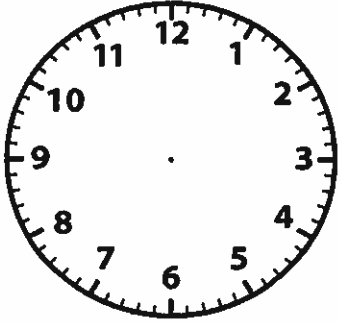
2000-10-30      12

11. Write the calendar date using numeric form.

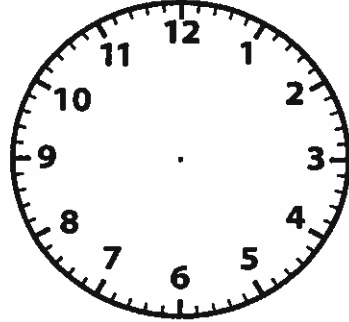
September 13, 2006      \_\_\_\_\_ 12

12. Write the following times on the clock faces.

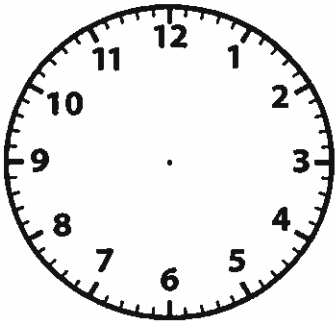
a) A quarter past 7.



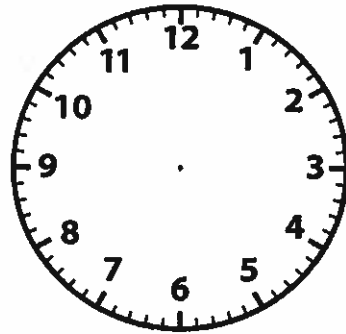
b) half-past 2.



c). 25 minutes to 9.



d). 7 minutes before 4.



8

