

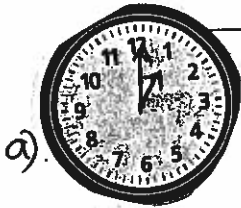
Name: \_\_\_\_\_

Date: \_\_\_\_\_

### Chapter 8 Test Page 1

1. Write these times using numbers and a.m. or p.m.

a) 1 o'clock in the morning / *afternoon* b) 11 o'clock at night / *morning*




a)

\_\_\_\_\_

a)

\_\_\_\_\_

2



b)

\_\_\_\_\_

b)

\_\_\_\_\_

2

2. Write these morning times 2 ways with numbers and words.

a)



\_\_\_\_\_ : \_\_\_\_\_

\_\_\_\_\_

b)



\_\_\_\_\_ : \_\_\_\_\_

\_\_\_\_\_

4

3. Write the numeric date and the 24-hour time for your birth.

\_\_ : \_\_

\_\_ / \_\_ / \_\_\_\_  
month Day year

5

4. Write the numeric date and the 24-hour time of your first class of the day

(today). Language Arts at ten minutes to nine

Date: \_\_\_\_ - \_\_\_\_ - \_\_\_\_  
year month day

Time: \_\_\_\_ : \_\_\_\_

5

18

5. Write the 24 hour time in standard form. (12 hour analog or digital clock)

22:45

— — 0 — —

12

6. Write the 24-hour time in standard form. (use a.m. or p.m.)

09:56

\_\_\_\_\_

12

7. Write the standard time in the 24-hour time form.

7:30 AM

— — : — —

12

8. Write the standard time in the 24-hour form.

9:45 PM

— — : — —

12

9. Write the times using numbers and A.M. or P.M.

a) A quarter to 10 in the morning.

\_\_\_\_\_

b) A quarter past 11 at night.

\_\_\_\_\_

16

10. Write the numeric date in calendar form.

2000-10-30

12

11. Write the calendar date using numeric form.

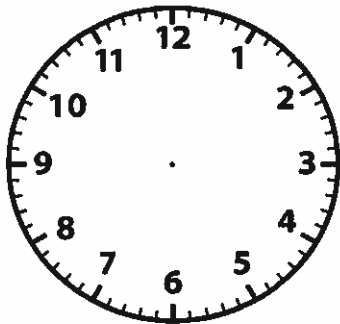
September 13, 2006

\_\_\_\_\_

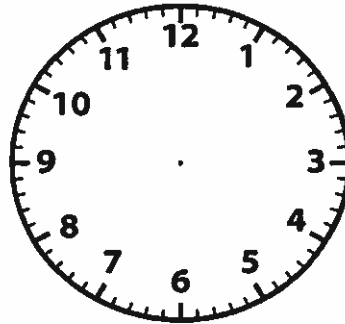
12

12. Write the following times on the clock faces.

a) A quarter past 7.

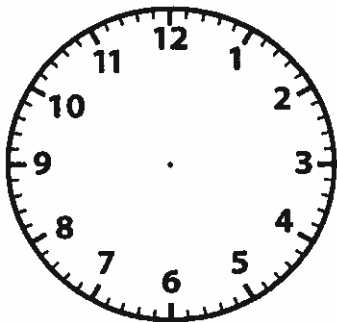


b) half-past 2.

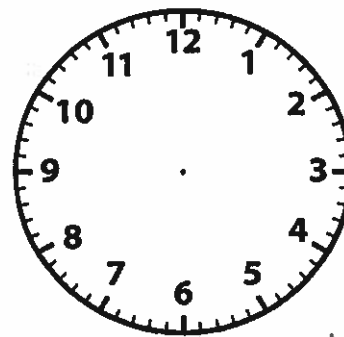


8

c). 25 minutes to 9.



d). 7 minutes before 4.



13. Show elapsed time on both a chart and number line.



2:15

Quarter after 2



5:30  
Half past 5

4

| T-Chart |            |
|---------|------------|
| Time    | hours/min. |
|         |            |



